



Anette K Matematik
Minus med perler

$$6 - 3$$



Anette K Matematik
Minus med perler

$$6 - 6$$




Anette K Matematik
Minus med perler

$$9 - 5$$




Anette K Matematik
Minus med perler

$$7 - 4$$



Anette K Matematik
Minus med perler

$$7 - 3$$




Anette K Matematik
Minus med perler

$$4 - 2$$



Anette K Matematik
Minus med perler

$$9 - 8$$



Anette K Matematik
Minus med perler

$$9 - 3$$




Anette K Matematik
Minus med perler

$$4 - 3$$



Anette K Matematik
Minus med perler

$$7 - 5$$



Anette K Matematik
Minus med perler

$$5 - 3$$




Anette K Matematik
Minus med perler

$$5 - 2$$



Anette K Matematik
Minus med perler

$$4 - 1$$



Anette K Matematik
Minus med perler

$$3 - 2$$




Anette K Matematik
Minus med perler

$$8 - 4$$



Anette K Matematik
Minus med perler

$$8 - 3$$



Anette K Matematik
Minus med perler

$$10 - 5$$



Anette K Matematik
Minus med perler

$$10 - 7$$

